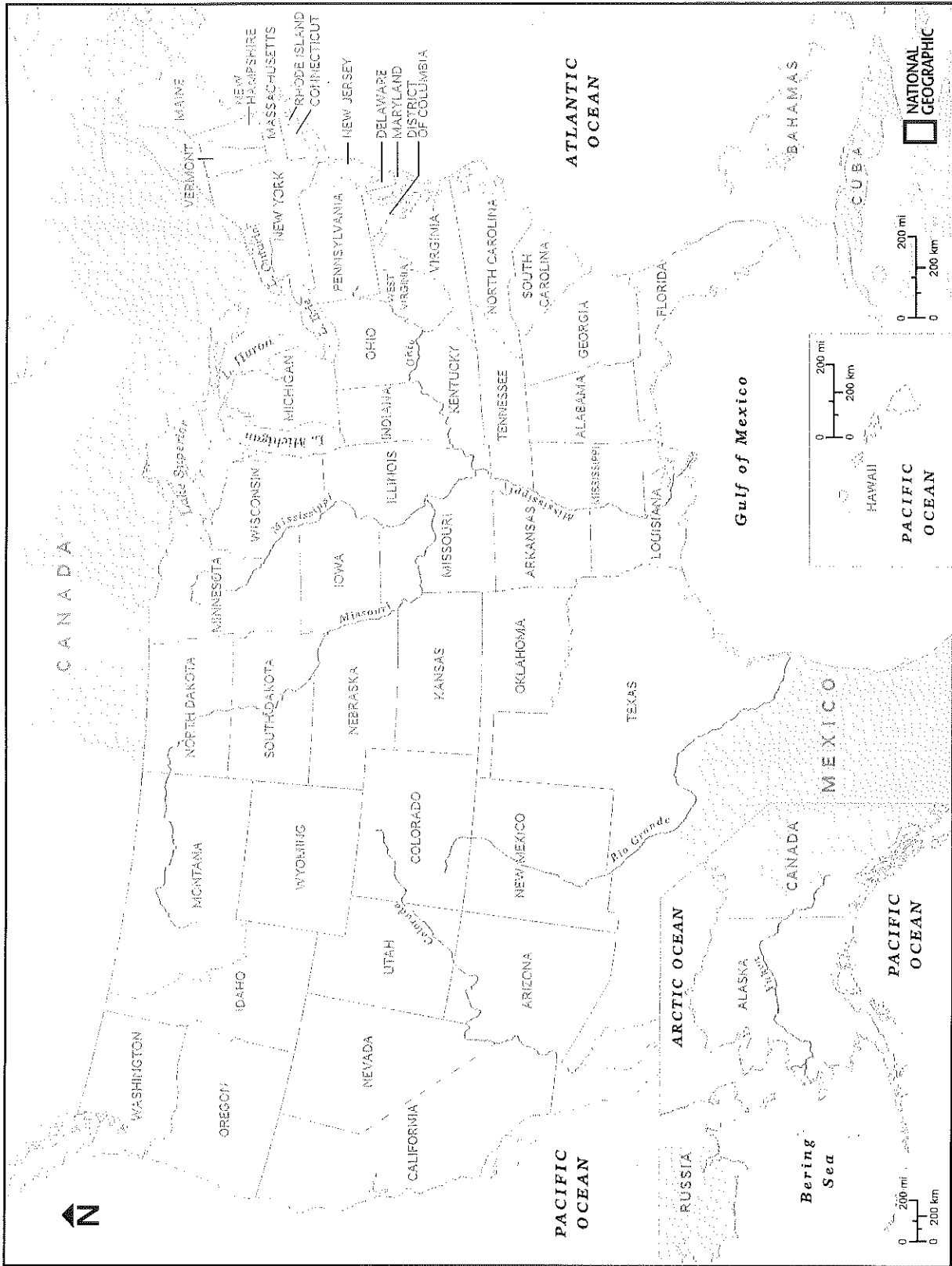


| PART 1

Using the labeled U.S. map on page 3, answer the following questions.

1. Which state borders Lake Erie—Nevada or Pennsylvania?
2. Which state borders the Mississippi River—Arkansas or Georgia?
3. Which state lies in the Great Plains—South Dakota or Maryland?
4. Which state is closer to the Pacific Ocean—Texas or Kentucky?
5. Which state has a longer border with Oklahoma—Colorado or Kansas?
6. Which state is located in the Midwest—Oregon or Indiana?
7. Which state borders Tennessee—Mississippi or New York?
- * 8. The source of the Mississippi River, Lake Itasca, is located in which state—Alabama or Minnesota?
9. Which state is west of the Appalachian Mountains—Wyoming or Delaware?
10. Pensacola Bay, an inlet of the Gulf of Mexico, borders which state—Florida or South Carolina?
11. In the spring, hermit thrushes migrate north through Pennsylvania and New York to which bordering state that calls the hermit thrush its state bird—Vermont or Michigan?
12. Which state shares a border with a different country—Alaska or Utah?




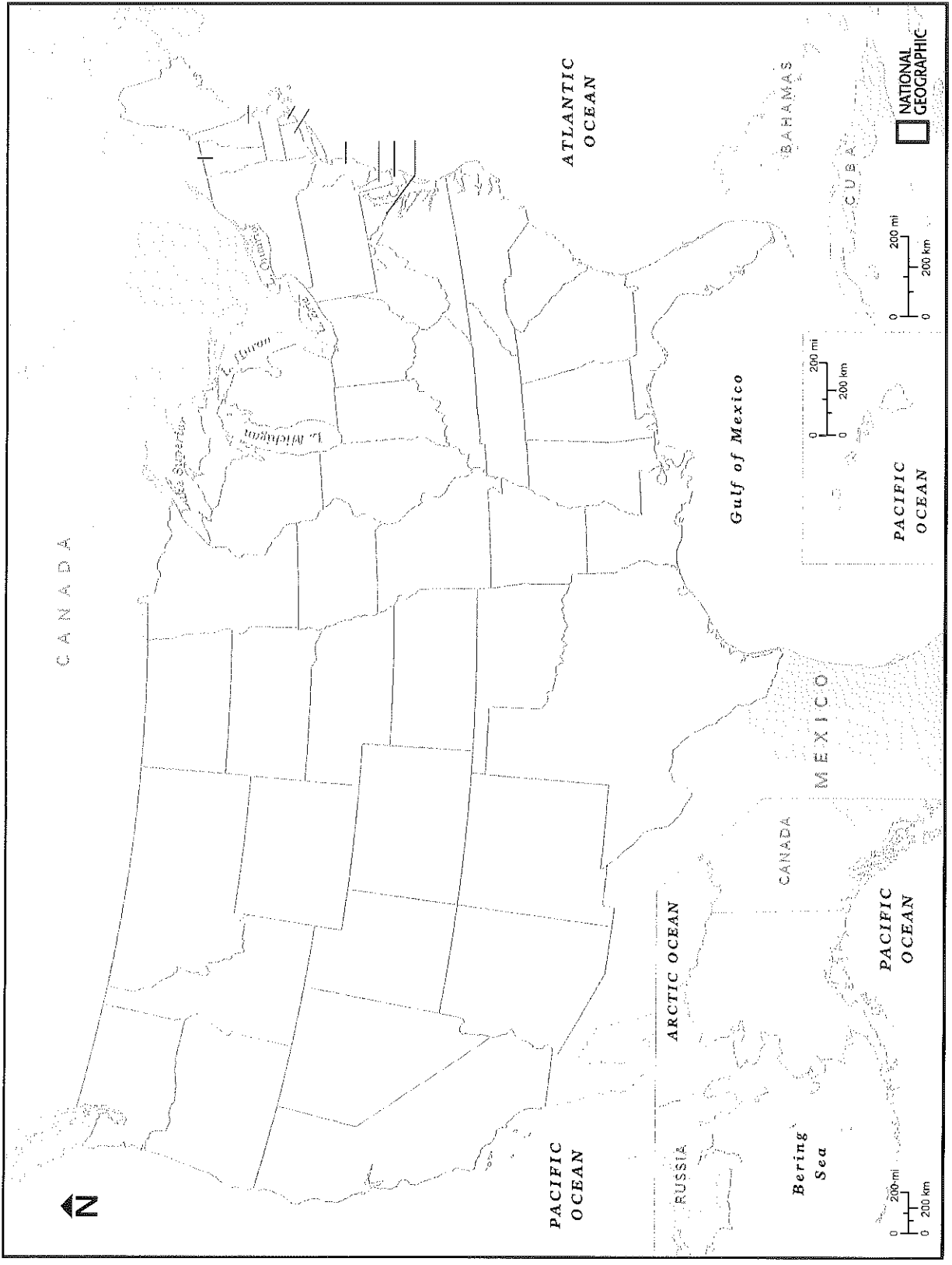


GEOBEE

PART 2

Fill in the blank outline map of the United States on page 5 and use it to answer the questions below.

1. Which state is farther west—Idaho or Rhode Island?
2. Which state is located in New England—New Hampshire or Virginia?
3. Which state has a larger total area—Massachusetts or Wisconsin?
4. Which is the easternmost state in the contiguous United States—Colorado or Maine?
5. Syracuse and Buffalo are cities in which state that borders Pennsylvania—New York or North Carolina?
6. Which state is farther north—New Mexico or Nebraska?
7. Which state has a longer coastline—Louisiana or Connecticut?
8. Which state borders more states—Washington or Illinois?
9. Which state includes the Pacific islands of Oahu and Maui—Arizona or Hawaii?
10. Which state lies directly south of Missouri—Arkansas or Iowa?
11. The Delmarva Peninsula includes parts of Delaware, Virginia, and which other state—Maryland or West Virginia?
12. The explorers Lewis and Clark first spotted the western meadowlark along the Great Falls of the Missouri River, in which state that calls the meadowlark its official bird—Montana or Georgia?





GEOBEE

ANSWER KEY

PART 1


1. Pennsylvania 2. Arkansas 3. South Dakota 4. Texas 5. Kansas 6. Indiana
7. Mississippi 8. Minnesota 9. Wyoming 10. Florida 11. Vermont 12. Alaska

PART 2


1. Idaho 2. New Hampshire 3. Wisconsin 4. Maine 5. New York 6. Nebraska
7. Louisiana 8. Illinois 9. Hawaii 10. Arkansas 11. Maryland 12. Montana

KEEP QUIZZING


MORE WAYS TO STUDY FOR THE GEOBEE ON NATGEOBEE.ORG



Play GeoBee Kahoots!
Help your students study
for the GeoBee with fun and
engaging quizzes.



Alexa, open Geo Quiz!
Try your luck with six new
questions released daily on
the National Geographic Geo
Quiz skill for Amazon Alexa.



Get the official study guide.
Study tips, resources, and
GeoBee basics are featured in
the latest edition of How to
Ace the National Geographic
Bee: Official Study Guide.



Study on the go with
the National Geographic
GeoBee Challenge app for
iOS and Android.

